

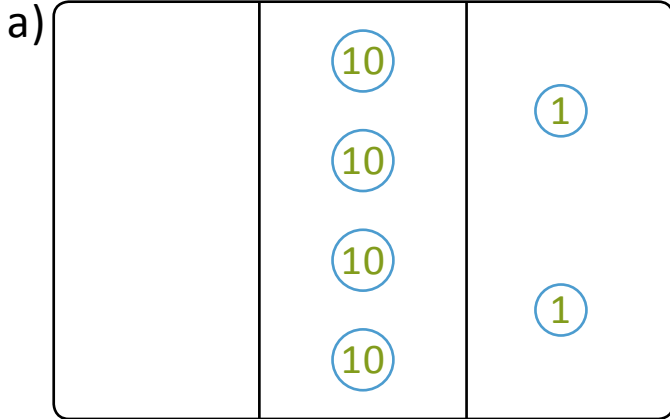


NAME \_\_\_\_\_ DATE \_\_\_\_\_

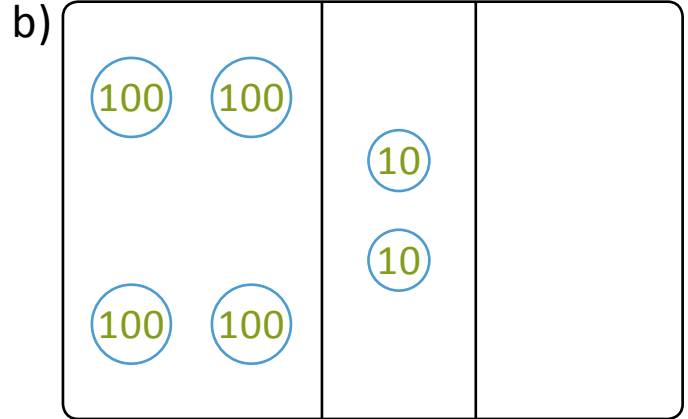
## FINDING NUMBERS BY CONVERSION

Conversion of ones into tens and tens into hundreds by using place value charts.

1) i) Tell the value of the following numbers.



a) \_\_\_\_



b) \_\_\_\_

ii) Fill in the sentences below to tell about the change from 42 to 420.

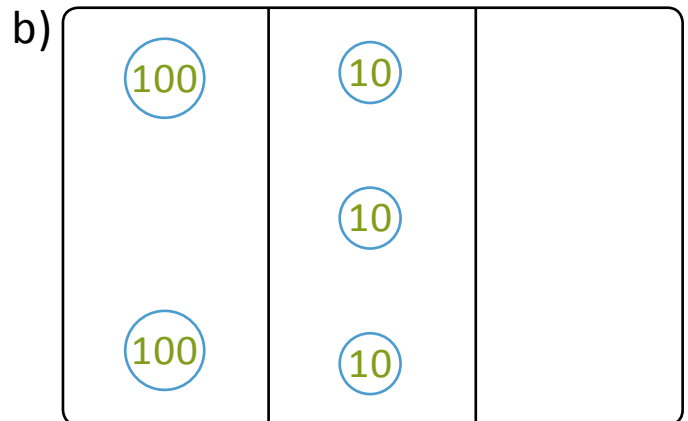
I changed \_\_\_\_ to \_\_\_\_.

I changed \_\_\_\_ to \_\_\_\_.

2) i) Tell the value of the following numbers.



a) \_\_\_\_



b) \_\_\_\_

ii) Fill in the sentences below to tell about the change from 23 to 230.

I changed \_\_\_\_ to \_\_\_\_.

I changed \_\_\_\_ to \_\_\_\_.